



What should I already know?

- **Electricity** is a form of **energy** that can be carried by wires and is used for heating and lighting, and to provide **power** for **devices**.
- **Sources** of light and sound may need **electricity** to work.

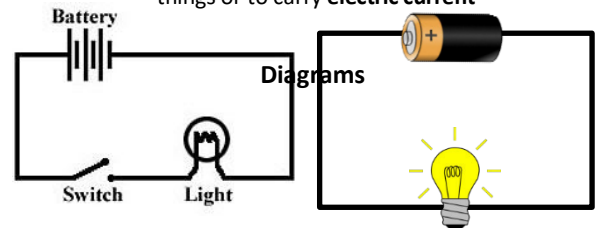
What will I know by the end of the unit?

- | | | | | | | | | | | |
|---|--|------------|------|--------|--------|-------|-------|-------|------------|------------|
| Where does electricity come from? | <ul style="list-style-type: none"> • Electricity is generated using energy from natural sources such as the Sun, oil, water and wind. | | | | | | | | | |
| Which appliances run on electricity ? | <ul style="list-style-type: none"> • These can also be called fuel sources. • Some appliances use batteries and some use mains electricity. • Batteries come in different sizes depending on how much and for how long the appliance is used. • Common appliances that use electricity. <table border="0"> <tr> <td> toaster</td> <td> lamp</td> <td> kettle</td> </tr> <tr> <td> laptop</td> <td> X-box</td> <td> phone</td> </tr> <tr> <td> torch</td> <td> headlights</td> <td> television</td> </tr> </table> | toaster | lamp | kettle | laptop | X-box | phone | torch | headlights | television |
| toaster | lamp | kettle | | | | | | | | |
| laptop | X-box | phone | | | | | | | | |
| torch | headlights | television | | | | | | | | |
| How does a circuit work? | <ul style="list-style-type: none"> • A complete circuit is a loop that allows electrical current to flow through wires. • A circuit contains a battery (cell), wires and an appliance that requires electricity to work (such as a bulb, motor or buzzer). • The electrical current flows through the wires from the battery (cell) to the bulb, motor or buzzer. • A switch can break or reconnect a circuit. • A switch controls the flow of the electrical current around the circuit. When the switch is off, the current cannot flow. This is not the same as an incomplete circuit. | | | | | | | | | |
| What are electrical conductors and insulators ? | <ul style="list-style-type: none"> • When objects are placed in the circuits, they may or may not allow electricity to pass through. • Objects that are made from materials that allow electricity to pass through a create a complete circuit are called electrical conductors. • Objects that are made from materials that do not allow electricity to pass through and do not complete a circuit are called electrical insulators. | | | | | | | | | |

Vocabulary

appliances	a device or machine in your home that you use to do a job such as cleaning or cooking. Appliances are often electrical .
battery	small devices that provide the power for electrical items such as torches
bulb	the glass part of an electric lamp , which gives out light when electricity passes through it.
buzzer	an electrical device that is used to make a buzzing sound
cell	a synonym for battery
circuit	a complete route which an electric current can flow around
component	the parts that something is made of
conductor	a substance that heat or electricity can pass through or along
current	a flow of electricity through a wire or circuit
device	an object that has been invented for a particular purpose a form of energy that can be carried by wires
electricity	and is used for heating and lighting, and to provide power for devices
energy	the power from sources such as electricity that makes machines work or provides heat
fuel	a substance such as coal, oil, or petrol that is burned to provide heat or power
mains	where the supply of water, electricity , or gas enters a building
motor	a device that uses electricity or fuel to produce movement
power	Power is energy , especially electricity , that is obtained in large quantities from a fuel source and used to operate lights, heating, and machinery
source	where something comes from a small control for an electrical device which
switch	you use to turn the device on or off

wires a long thin piece of metal that is used to fasten things or to carry **electric current**



These are complete circuits - they have a **battery** and a **component**. The **wires** are placed in the right places of the **battery** for the circuit to work.



Investigate!

- Research how to work safely with **electricity**.
- Make a variety of **circuits**, investigating which **circuits** work and why.
- Name the basic parts including **cells**, **batteries**, **wires**, **bulbs**, **switches**, **motors** and **buzzers**.
- Draw **circuits** using pictorial representations (not circuit symbols).
- Create **circuits** using **switches**.

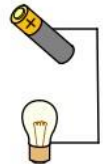
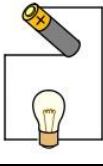
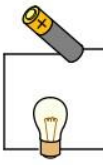



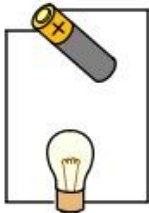





These **circuits** will not work as they are incomplete.

Riverside Primary School - Science

Topic: Electricity

Year: 4

Strand: Physics

<p>Question 1: Another name for a battery is:</p> <table border="1" style="width: 100%; border-collapse: collapse;"> <tr><td>circuit</td><td style="width: 15%;"></td><td style="width: 15%;"></td></tr> <tr><td>light</td><td></td><td></td></tr> <tr><td>buzzer</td><td></td><td></td></tr> <tr><td>cell</td><td></td><td></td></tr> </table>	circuit			light			buzzer			cell					<p>Question 7: Why is it dangerous to use an electrical appliance near water?</p> <table border="1" style="width: 100%; border-collapse: collapse;"> <tr><td style="height: 100px;"></td><td></td><td></td></tr> </table>												
circuit																											
light																											
buzzer																											
cell																											
<p>Question 2: Which of these need electricity to work?</p> <table border="1" style="width: 100%; border-collapse: collapse;"> <tr><td>torch</td><td></td><td></td></tr> <tr><td>mobile phone</td><td></td><td></td></tr> <tr><td>games console</td><td></td><td></td></tr> <tr><td>car</td><td></td><td></td></tr> </table>	torch			mobile phone			games console			car																	
torch																											
mobile phone																											
games console																											
car																											
<p>Question 3: How will you know if a material conducts electricity?</p> <table border="1" style="width: 100%; border-collapse: collapse;"> <tr><td>Electricity will flow freely and the circuit will work</td><td></td><td></td></tr> <tr><td>Electricity will not flow and the circuit will not work</td><td></td><td></td></tr> <tr><td>The battery will not work</td><td></td><td></td></tr> </table>	Electricity will flow freely and the circuit will work			Electricity will not flow and the circuit will not work			The battery will not work					<p>Question 8: A circuit will not work if....(tick three):</p> <table border="1" style="width: 100%; border-collapse: collapse;"> <tr><td>there is no battery</td><td></td><td></td></tr> <tr><td>the switch is off</td><td></td><td></td></tr> <tr><td>there is a break in the circuit</td><td></td><td></td></tr> <tr><td>there is no switch</td><td></td><td></td></tr> </table>	there is no battery			the switch is off			there is a break in the circuit			there is no switch					
Electricity will flow freely and the circuit will work																											
Electricity will not flow and the circuit will not work																											
The battery will not work																											
there is no battery																											
the switch is off																											
there is a break in the circuit																											
there is no switch																											
<p>Question 4: Which of these are conductors of electricity?</p> <table border="1" style="width: 100%; border-collapse: collapse;"> <tr><td>plastic comb</td><td></td><td></td></tr> <tr><td>cardboard strip</td><td></td><td></td></tr> <tr><td>aluminium spoon</td><td></td><td></td></tr> <tr><td>copper coin</td><td></td><td></td></tr> </table>	plastic comb			cardboard strip			aluminium spoon			copper coin					<p>Question 9: When more batteries are added to a complete circuit...</p> <table border="1" style="width: 100%; border-collapse: collapse;"> <tr><td>the light bulb does not go on</td><td></td><td></td></tr> <tr><td>the light bulb becomes brighter</td><td></td><td></td></tr> <tr><td>the circuit does not work</td><td></td><td></td></tr> <tr><td>the switch goes off</td><td></td><td></td></tr> </table>	the light bulb does not go on			the light bulb becomes brighter			the circuit does not work			the switch goes off		
plastic comb																											
cardboard strip																											
aluminium spoon																											
copper coin																											
the light bulb does not go on																											
the light bulb becomes brighter																											
the circuit does not work																											
the switch goes off																											
<p>Question 5: Which of these circuits will light?</p> <table border="1" style="width: 100%; border-collapse: collapse;"> <tr> <td style="text-align: center;">  </td> <td></td> <td></td> </tr> <tr> <td style="text-align: center;">  </td> <td></td> <td></td> </tr> <tr> <td style="text-align: center;">  </td> <td></td> <td></td> </tr> </table>												<p>Question 10: Why will this circuit not work?</p> <table border="1" style="width: 100%; border-collapse: collapse;"> <tr> <td style="text-align: center;">  </td> <td></td> <td></td> </tr> <tr> <td style="height: 100px;"></td> <td></td> <td></td> </tr> </table>															
																											
																											
																											
																											
<p>Question 6: Objects that are made from materials that do not allow electricity to pass through are called:</p> <table border="1" style="width: 100%; border-collapse: collapse;"> <tr><td>conductors</td><td></td><td></td></tr> <tr><td>insulators</td><td></td><td></td></tr> <tr><td>batteries</td><td></td><td></td></tr> </table>	conductors			insulators			batteries																				
conductors																											
insulators																											
batteries																											